


# さくらんぼ<sup>けいさん</sup>計算


①

$9 + 8 =$



②

$16 - 8 =$




ちいさくいつぽ。

# さくらんぼ<sup>けいさん</sup>計算


①

$8 + 8 =$



②

$15 - 8 =$




ちいさくいつぽ。

# さくらんぼ<sup>けいさん</sup>計算


①

$7 + 8 =$



②

$14 - 8 =$




ちいさくいつぽ。

# さくらんぼ<sup>けいさん</sup>計算


①

$6 + 8 =$



②

$13 - 8 =$



ちいさくいつぽ。